

MIDTERM 2
 MAT 141
 11/17/00

Name

Sec.

ID number

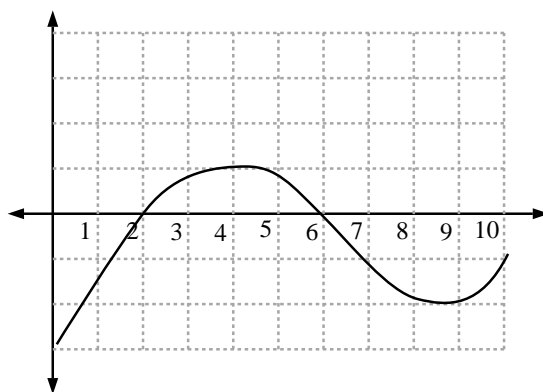
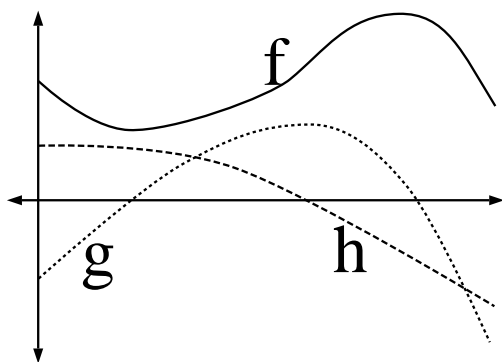
1	2	3	4	total
---	---	---	---	-------

THIS EXAM IS WORTH 40 POINTS. PUT ALL ANSWERS IN THE SPACE PROVIDED. YOU MAY USE THE BACKS OF PAGES FOR SCRATCH WORK.

1. (1 pt each, 20 pts total) Place the letter corresponding to the correct answer in the box next to each question. Each correct answer is worth 2 points.

- (i) Suppose $f(x) = x^4 + x^3 + 1$. Then f has
 (a) an absolute maximum at $x = 0$ (b) an absolute minimum at $x = 0$ (c) a local minimum at $x = 3/4$ (d) an absolute minimum at $x = -3/4$ (e) a local minimum at $x = 0$ (f) none of these.

- (ii) Suppose f, g, h are graphed on the left below. Which of the following is a possible relationship based on the graphs?
 (a) $g = f', h = g'$ (b) $g = h', f = g'$ (c) $f = g', h = f'$ (d) $f = h', g = f'$ (e) $h = f', g = h'$ (f) $h = g', f = h'$



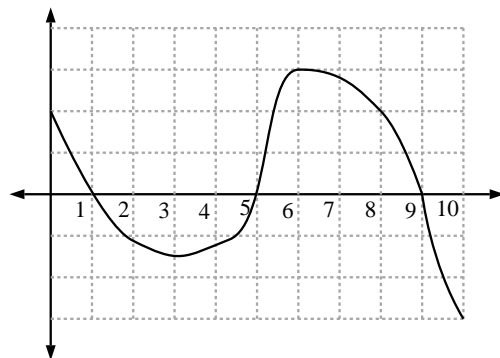
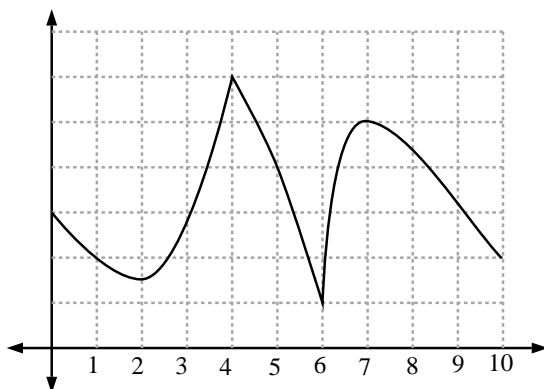
- (iii) Suppose f is graphed on the right above. If we use Newton's method with initial guess $x_0 = 3$, then our next guess will be approximately $x_1 =$
 (a) 9 (b) 7 (c) 6 (d) 4 (e) 3 (f) 1

- (iv) Suppose f has values given by the following table. What is the derivative of $h(x) = f^2(2x)$ at $x = 2$?

x	0	1	2	3	4
$f(x)$	2	3	5	4	4
$f'(x)$	0	2	-1	-1	1

- (a) -4 (b) 8 (c) 12 (d) 16 (e) 20 (f) none of these.

- (v) What is the slope of the curve given by $x^2 - xy + y^2 = 7$ at the point $(x, y) = (-1, 2)$?
(a) 1 **(b)** $\frac{4}{5}$ **(c)** $\frac{3}{4}$ **(d)** 0 **(e)** $\frac{6}{5}$ **(f)** none of these.
- (vi) Find $\frac{dy}{dx}$ if $x^2y + y = 1$
(a) $\frac{dy}{dx} = \frac{-2xy}{x^2+1}$ **(b)** $\frac{dy}{dx} = \frac{2xy}{x^2-1}$ **(c)** $\frac{dy}{dx} = \frac{xy}{2y+x^2}$ **(d)** $\frac{dy}{dx} = \frac{-2xy}{y+x}$ **(e)** $\frac{dy}{dx} = (1 - 2xy)(x^2 - 1)$
(f) none of these.
- (vii) Suppose we try to find roots of $x^3 - x - 2 = 0$ by Newton's method using the initial guess $x_0 = 1$. The next guess will be
(a) $x_1 = 0$ **(b)** $x_1 = 1.5$ **(c)** $x_1 = 2$ **(d)** $x_1 = 3$ **(e)** $x_1 = -1$ **(f)** none of these.
- (viii) Suppose $f(x) = \frac{1}{x} - 3$. Then the recursion formula in Newton's method is
(a) $x_{n+1} = x_n - 3$ **(b)** $x_{n+1} = 2x_n - 3x_n^2$ **(c)** $x_{n+1} = x_n + 3x_n^2$ **(d)** $x_{n+1} = x_n - x_n^2$ **(e)** $x_{n+1} = x_n - 3/x_n^2$ **(f)** none of these.
- (ix) Suppose $f'(x) = x^2 + \sin^2(x)$. Then on $(-\infty, \infty)$ f is
(a) concave up **(b)** concave down **(c)** increasing **(d)** decreasing **(e)** constant **(f)** none of these.
- (x) Suppose f is as graphed on the left below. The set of critical points of f is
(a) $\{2, 4\}$ **(b)** $\{2, 7\}$ **(c)** $\{4, 6\}$ **(d)** $\{2, 4, 6, 7\}$ **(e)** $\{0, 2, 4, 6, 7, 10\}$ **(f)** none of these.



- (xi) Suppose g' is graphed on the right above. Then g is increasing and concave up on the interval
(a) $[0, 1]$ **(b)** $[1, 3]$ **(c)** $[3, 5]$ **(d)** $[5, 6]$ **(e)** $[6, 9]$ **(f)** none of these.
- (xii) Suppose g' is graphed on the right above. The local maximum(s) of g (excluding endpoints) are exactly
(a) 1, 9 **(b)** 5 **(c)** 3 **(d)** 1 **(e)** 6 **(f)** none of these.
- (xiii) Suppose g' is graphed on the right above. The inflection points of g are exactly
(a) 1, 9 **(b)** 1 **(c)** 3, 6 **(d)** 5 **(e)** 1, 5, 9 **(f)** none of these.

- (xiv) Find the linearization of $f(x) = x^2 + x$ at $x = 1$.
(a) $L(x) = 3x$ **(b)** $L(x) = (x - 1)$ **(c)** $L(x) = -2(x - 1) + 1$ **(d)** $L(x) = 2x + 1$ **(e)** $L(x) = 3(x - 1) + 2$ **(f)** none of these.
- (xv) Use differentials to estimate the change in the volume of a cube $S = x^3$ when the edge length goes from x_0 to $x_0 + dx$
(a) $3x_0^2 dx$ **(b)** $6x_0 dx$ **(c)** $12x_0^2 dx$ **(d)** $3dx$ **(e)** $3x_0 dx$ **(f)** none of these.
- (xvi) The solution of the initial value problem $\frac{dy}{dx} = \cos(x) + 1$, $y(\pi) = 0$ is
(a) $y = \sin(x) + 1$ **(b)** $y = \sin(x) + x$ **(c)** $y = \sin(x) + x - \pi$ **(d)** $y = \sin(x) + x + \pi$ **(e)** $y = \sin(x) + \pi$ **(f)** none of these.
- (xvii) Suppose $f'(x) = 1 - \sin^{10}(x)$. Then on the interval $[0, \frac{1}{2}\pi]$ the function f is
(a) increasing and concave down **(b)** increasing and concave up **(c)** decreasing and concave down **(d)** decreasing and concave up **(e)** constant **(f)** none of these.
- (xviii) What is the name of the following result: "Suppose f is continuous on $[a, b]$, differentiable on (a, b) and $f(a) = f(b) = 0$. Then there is a point $c \in (a, b)$ such that $f'(c) = 0$."
(a) The intermediate value theorem **(b)** Green's theorem **(c)** Rolle's theorem **(d)** The mean value theorem **(e)** The min-max theorem **(f)** none of these.
- (xix) The function $f(x) = x^3 + 3x^2 - 3x + 1$ has a point of inflection at $x = ?$
(a) -2 **(b)** -1 **(c)** 0 **(d)** 1 **(e)** 2 **(f)** none of these.
- (xx) Use the linearization of $x^{1/3}$ at $x = 27$ to approximate $29^{1/3}$.
(a) $3\frac{1}{3}$ **(b)** $3\frac{1}{2}$ **(c)** $3\frac{7}{12}$ **(d)** $3\frac{2}{27}$ **(e)** $3\frac{5}{6}$ **(f)** none of these.

2. (2 pts each, 10 pts total) Find each of the following indefinite integrals

(i) $f(x^3 - x^2 + 2)dx,$

(ii) $\int \sec^2(x) dx,$

(iii) $\int (3x + 2)^9 dx,$

(iv) $\int \sin^4(t) \cos(t) dt,$

(v) $\int 6 \sin^2(t^2) \cos(t^2) t dt,$

3. **(5 pts)** The coordinates of a particle in the xy -plane are differentiable functions of time t satisfying $dx/dt = -1m/sec$ and $dy/dt = 5m/sec$. How fast is the particle's distance to the origin changing as it passes through the point $(x, y) = (5, 12)$?

4. **(5 pts)** Your company can manufacture x hundred grade A tires and y hundred grade B tires a day where $0 \leq x \leq 4$ and

$$y = \frac{42 - 10x}{5 - x}.$$

Your profit on grade A tires is twice the profit on grade B tires. Find the most profitable number of each kind of tire to make.